


Elapsed Time

Task Cards

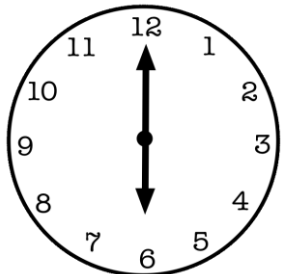


By Melissa Yglesias
www.moretime2teach.blogspot.com


Free

Elapsed Time

Find the elapsed time in hours and minutes:



Start




End


1.

Elapsed Time

Find the elapsed time in hours and minutes:



Start




End


2.

Elapsed Time

Find the elapsed time in hours and minutes:



Start




End

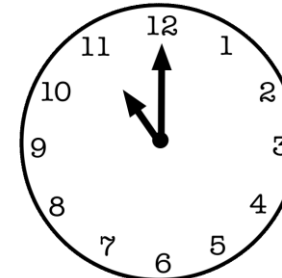
3.

Elapsed Time

Find the elapsed time in hours and minutes:



Start




End


4.

Elapsed Time

Find the elapsed time in hours and minutes:



Start

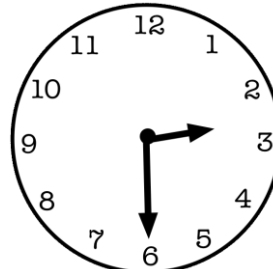


End


5.

Elapsed Time

Find the elapsed time in hours and minutes:



Start




End


6.

Elapsed Time

Find the elapsed time in hours and minutes:



Start

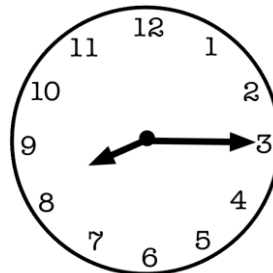


End


7.

Elapsed Time

Find the elapsed time in hours and minutes:



Start




End


8.

Elapsed Time

Find the elapsed time in hours and minutes:



Start




End


9.

Elapsed Time

Find the elapsed time in hours and minutes:



Start




End


10.

Elapsed Time

Find the elapsed time in hours and minutes:



Start

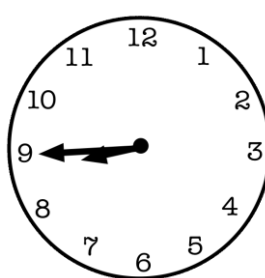


End


11.

Elapsed Time

Find the elapsed time in hours and minutes:



Start



End

12.

Elapsed Time

Read the problem carefully and solve.

Ryan and Raquelle started playing with their iPads at 2:00 pm. If they played for 2 hours and 15 minutes, at what time did they finish playing?

13.

Elapsed Time

Read the problem carefully and solve.

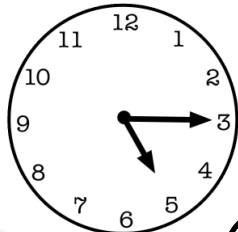
Nestor watched a movie at his friend's house. If the movie started at 3:00 pm and he arrived 30 minutes before the movie began, at what time did he arrive?

14.

Elapsed Time

Read the problem carefully and solve.

Michelle went to see a play. The clock below shows the time the play began. If the play ended at 7:15, how long did the play last?

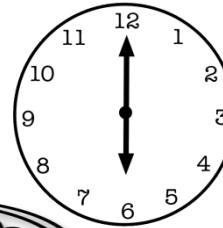


15.

Elapsed Time

Read the problem carefully and solve.

Sam went to see a play. The clock below shows the time she arrived at the theatre. If the play started at 6:30, how long did she have to wait before the play began?



16.

Elapsed Time

Read the problem carefully and solve.

Kathy took a road trip with her friend Vicky. They left at 12:15pm and returned 4 hours later. At what time did they return home?

17.

Elapsed Time

Read the problem carefully and solve.

Michael and his family took a trip to Disney World. They left at 7:45am and arrived at their hotel 2 hours later. At what time did they get to the hotel?

18.

Elapsed Time

Read the problem carefully and solve.

Vivian is going on her first train ride. Her train will leave the station at 3:15 pm. If the ride lasts 1 hour and 30 minutes, at what time will she arrive at her destination?

19.

Elapsed Time

Read the problem carefully and solve.

Tonya read 2 chapters of her book. She started reading at 8:30am and stopped reading 45 minutes later. At what time did she finish reading?

20.

Name: _____ Date: _____

Score

Elapsed Time Task Cards

| | | | | |
|-----|-----|-----|-----|-----|
| 1. | 2. | 3. | 4. | 5. |
| 6. | 7. | 8. | 9. | 10. |
| 11. | 12. | 13. | 14. | 15. |
| 16. | 17. | 18. | 19. | 20. |

Name: _____ Date: _____

Score

Answer Key

Elapsed Time Task Cards

| | | | | |
|------------------------------|------------------------------|-----------------------------|--------------------|-----------------------------|
| 1. 3 hrs. | 2. 2 hrs. | 3. 5 hrs. | 4. 3 hrs. | 5. 3 hrs. 30 min. |
| 6. 1 hr. 30 min. | 7. 4 hrs. 15 min. | 8. 2 hrs. 45 min. | 9. 15 min. | 10. 2 hr. 15 min. |
| 11. 2 hrs. 45 min. | 12. 2 hrs. 30 min. | 13. 4:15 pm | 14. 2:30 pm | 15. 2 hrs. |
| 16. 30 min. | 17. 4:15 pm | 18. 9:45 am | 19. 4:45 pm | 20. 9:15 am |

Thank You!

I hope you enjoy the convenience and quality of your FREEBIE! If so, I would appreciate it if you would provide feedback at my store. I love hearing what my customers have to say and take every comment and suggestion to heart. Also, if you'd like to be notified when a new item is added, then remember to click on the "follow me" button at [TPT](#). If you should have any questions at any time, please don't hesitate to contact me at moretime2teach@gmail.com. I'd love to hear from you!

Warm regards,

Sincerely,

Melissa

Graphics by:



I'd love for you to come by and
check out some more of my work
and even snag yourself a few
FREEBIES!

Teachers Pay Teachers Store
www.moretime2teach.blogspot.com

*** Cause & Effect *
Reading Response
Flipbook**

(2nd-4th Grade)



Created by Melissa Spletter
www.moretime2teach.blogspot.com


**Text Structure
Flipbook Packet**

(2nd-4th Grade)



Created by Melissa Spletter
www.moretime2teach.blogspot.com

**FRACTIONS
Math unit**



Created by Melissa Spletter
www.moretime2teach.blogspot.com

**Community
Resource Pack**

To enhance your writing skills!

Created by Melissa Spletter
www.moretime2teach.blogspot.com



**SCIENCE Unit on
Matter**

Topics include: properties, molecules, solid,
liquid, gas, physical vs. chemical changes,
solubility, mixtures, states, volume, density,
length, temperature.
"14 Different Experiments Included!"

Created by Melissa Spletter
www.moretime2teach.blogspot.com



**SCIENCE Unit on
Energy**

Topics include: potential vs. kinetic energy, different
forms of energy, renewable & non-renewable resources,
reflection, refraction, transparent, translucent, opaque,
electrical currents, circuits, etc...
"16 Different Experiments Included!"

Created by Melissa Spletter
www.moretime2teach.blogspot.com



**LINE PLOTS
Math unit**



Created by Melissa Spletter
www.moretime2teach.blogspot.com



**PICTOGRAPHICS
Math unit**

| Mammals that live in the desert | |
|---------------------------------|----|
| Beaver Squirrels | 10 |
| Woodrats | 8 |
| Woodrats | 8 |
| Thomomys | 4 |
| Thomomys | 4 |
| Key: Each = 10 Mammals | |

Created by Melissa Spletter
www.moretime2teach.blogspot.com

